



INDIAN SCHOOL DARSAIT
ACTIVITY WORKSHEET EVALUATION - I
SEPTEMBER 2016
MATHEMATICS



Grade: II Div:


Date:.....

Name:.....

G:

Roll No:.....





- 1) Reema and Saumya went to visit the zoo with their parents. There were four different types of animals – Lions, deer, ducks and tortoises in the zoo. The pictogram shows how many they have of each animal.



Help Reema and Saumya answer the questions using the data on the pictogram.

1. How many ducks are there? _____
2. Which two animals are of same number? _____
3. How many animals live in the zoo altogether? _____
4. Which animal is highest in number? _____
5. How many more tortoises do they have than lions? _____

II) A shopkeeper sells various flavours of ice-cream on a day. Read the information given and answer the questions below.

Flavour	Number of cones
Strawberry 	38
Vanilla 	25
Chocolate 	43
Mango 	20

1. Which flavour is most popular? _____
2. How many people like strawberry flavour? _____
3. Which is liked more: vanilla or mango? _____
4. Which flavour is least popular? _____
5. How many cones of chocolate and mango did the shopkeeper sell altogether? _____