



INDIAN SCHOOL DARSAIT
MATHEMATICS
TIME
PRACTICE WORKSHEET



Class: IV Sec:

Date:.....

Name:

Roll No:.....

I. Fill in the blanks.

- 6 weeks = _____ days.
- 3 hours before midnight is _____
- 2 hours after 11: 25 p.m. is _____
- There are _____ days in a leap year.
- There are _____ hours in a week.
- A period of 100 years is called a _____
- Raju slept from 10: 45 p.m. to 6:45 a.m. He slept for _____ hours.

II. Match the correct time .

- | | |
|--------------------------------|----------------|
| a. 30 min after 3:45 p.m. | i. 8:45 a.m. |
| b. 15 min before 9:00 a.m. | ii. 4:15 p.m. |
| c. 4 hours before 10 : 40 a.m. | iii. 3:30 p.m. |
| d. 2 hours after 1: 30 p.m. | iv. 6:40 a.m. |

III. Do as directed.

a. Express the time in 24 hour clock:

- | | |
|-------------------------|------------------------|
| h. 04:35 p.m. - _____ | ii. 12 noon – _____ |
| iii. 02:55 a.m. - _____ | iv. 07:15 p.m. - _____ |

b. Express the time in 12 hour clock:

- | | |
|--------------------------|--------------------------|
| i. 15:15 hours - _____ | ii. 20: 05 hours – _____ |
| iii. 12:55 hours - _____ | iv. 09:40 hours- _____ |

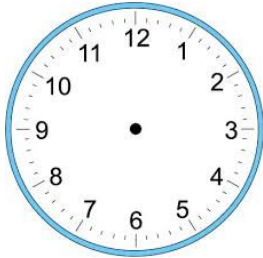
c. Solve the following.

- An aircraft left the airport at 10:30 p.m. It travelled for 4 hours. When did the flight reach its destination?

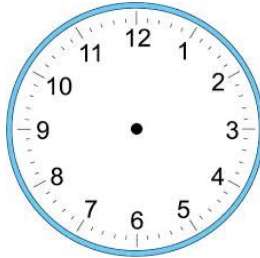
ii. Rahul's aunt came to visit him on 25th January. She left on 10th February. How many days did she stay?

IV. Draw the hands of the clock to show the time given.

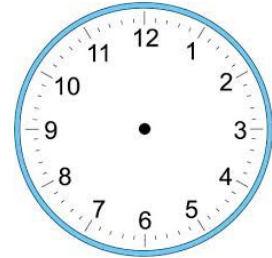
i. 04 :53 hours



ii. 17:14 hours

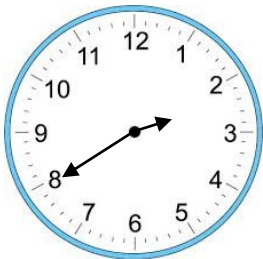


iii. 00:20 hours




V. Write the time in two ways.


i.



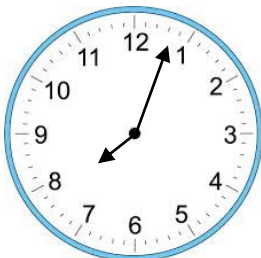
ii.



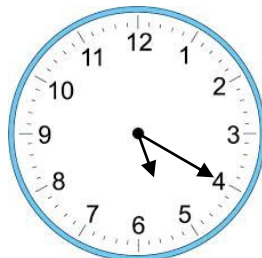
iii.



iv.



v.



vi.

