



INDIAN SCHOOL DARSAIT  
TERM II – MARCH 2018  
YEARLY EXAMINATION  
ENVIRONMENTAL STUDIES



Class :IV Sec: G  
Date: 06-03-2018.

Max.Marks:50  
Time: 2 hrs.  
Roll No: .....

Name: .....

Q.I **FILL IN THE BLANKS**  $\frac{1}{2} \times 6 = 3$

- a) \_\_\_\_\_ is the condition of the atmosphere around us.
- b) Plants and animals breathe \_\_\_\_\_ dissolved in water.
- c) \_\_\_\_\_ is a festival of trees.
- d) The larva of a butterfly is called \_\_\_\_\_.
- e) A spider lives in the \_\_\_\_\_ it spins.

Q.II **NAME THE FOLLOWING**  $1 \times 4 = 4$

- a) Anything that has mass and occupies space is called \_\_\_\_\_.
- b) Birds that walk over shallow water are called \_\_\_\_\_ birds.
- c) A drawing of a neighborhood, a city or a country \_\_\_\_\_.
- d) Electricity produced by the energy of flowing water is called \_\_\_\_\_.

Q.III **DEFINE THE FOLLOWING TERMS**  $1 \times 4 = 4$

- a) Water cycle
- b) Nocturnal animals
- c) Solution
- d) Shoot system

Q.IV **MATCH THE FOLLOWING**  $\frac{1}{2} \times 4 = 2$

- | A            | B                   |
|--------------|---------------------|
| a) Kerala    | 1) Dal lake         |
| b) Kashmir   | 2) Ghoomar dance    |
| c) Meghalaya | 3) Gateway of India |
| d) Rajasthan | 4) Shillong         |
|              | 5) Coconut tress    |

Q.V **PICK THE ODD ONE OUT AND GIVE REASON FOR YOUR ANSWER** 1 X 4 = 4


- a) Monkeys                  Squirrels                  Leopards                  Bats
- b) Queen bee                  Drone bee                  Apiary                  Worker bee
- c) Muscular energy          Wind energy          Water energy          Gravitational force
- d) Crow                          Sparrow                  Duck                          Mynah

Q.VI **CITE REASONS** 2 X 4 = 8


- a) Liquids flow
- b) Rajasthan is called a shopper's paradise
- c) Sun causes winds
- d) Dogs, cats and elephants are mammals

Q.VII **IDENTIFY THE PICTURE AND ANSWER THE QUESTIONS** 1 X 5 = 5

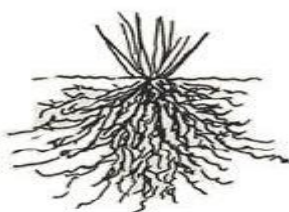
- a)  It keeps people warm in winter. What is it?



- b)  What type of molecules are there in this state of matter



- c)  Name the type of root



- d)  Name the type of force



e)



Name the type of energy used  
in this picture

Q.VIII

**ANSWER THE FOLLOWING QUESTIONS**

3 X 4 = 12

- a) What is the difference between physical and chemical change?  
Give two examples of each.
- b) How does weather affect the life of people?
- c) Describe Kashmir giving the following information?  
a) Capital  
b) Dress  
c) Kahwa  
d) Kangri
- d) Why do animals live in groups?

Q.IX

The molecules of solids are closely packed that makes it hard to be broken. Do you think we should adopt this quality of unity. Why or why not? Justify your answer.

1 X 2 = 2

Q.X

Draw and describe what is water cycle?

1 X 4 = 4