



INDIAN SCHOOL DARSAIT  
TERM II- JANUARY 2018  
PERIODIC TEST - II  
ENVIRONMENTAL STUDIES



Class: IV Sec: ....

Date: 30-01-'18

Name: .....

Max.Marks:20

Time: 1hr

Roll No:.....

General Instructions

1. All the questions are compulsory
2. Answer all questions in a separate paper

Q.I **Choose the correct answer :** 4 X ½ = 2

- a) Parrot and woodpecker are \_\_\_\_\_ birds.  
a) Climbing b) Swimming c) Scratching d) Running
- b) When we push a moving swing, force changes the \_\_\_\_\_ of the swing.  
a) Direction b) Energy c) Shape d) Speed
- c) The sub-direction \_\_\_\_\_ lies between North and West.  
a) North east b) North west c) South east d) South west
- d) Which of the following pair is correct with respect to colours on a map?  
a) Green-water bodies b) dark brown- coastal plains c) yellow- high lands d) blue-snow

Q.II **Name the following :** 4 x ½ = 2

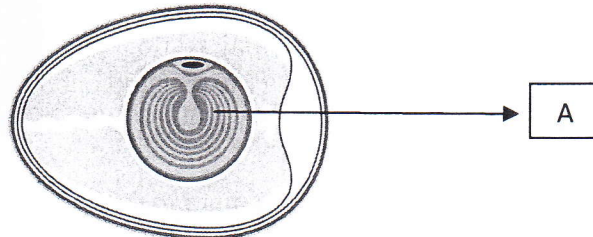
- a) The type of birds that tear flesh of their prey.
- b) Any two sources of energy.
- c) The tool used to show distance on a map.
- d) The explanation of symbols.

Q.III **Explain the following:** 2 x 1= 2

- a) Perching.
- b) Hydroelectricity.


Q.IV **Identify the pictures and answer the questions based on it :** 4 x 1= 4

a)




- i) Name the part marked as A.
- ii) What is its function in an egg?

b)



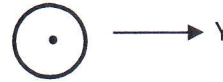
- i) Identify the type of beak.
- ii) What kind of food do they eat?

c)



- i) Identify the picture.
- ii) What is its use?

d)



- i) What do X and Y represent on a map?

V

**Give reason:**

2 x 1 = 2

- a) Work is not done when we push the wall.
- b) The female birds lay eggs and sits on the egg.

VI

**Answer the following questions:**

3 x 2 = 6

- a) Differentiate between mechanical and gravitational force by giving examples.
- b) How do crocodiles take care of their young ones?
- c) What are wading birds? Why do they have wide spreading toes?

VII

**Draw the missing part 'B' in the lifecycle. Label the pictures i) , ii) and iii)**

4 x 1/2 = 2

