



INDIAN SCHOOL DARSAIT  
ACTIVITY - EVALUATION II  
NOVEMBER 2016  
ENVIRONMENTAL SCIENCE



Grade: II Div: ....






Date:.....

Name:.....

G:.....

Roll No:.....

I Number these means of transport from the slowest to the fastest:-



II Sort out these vehicles and write them in the correct columns:-

Car

Tonga

Bicycle

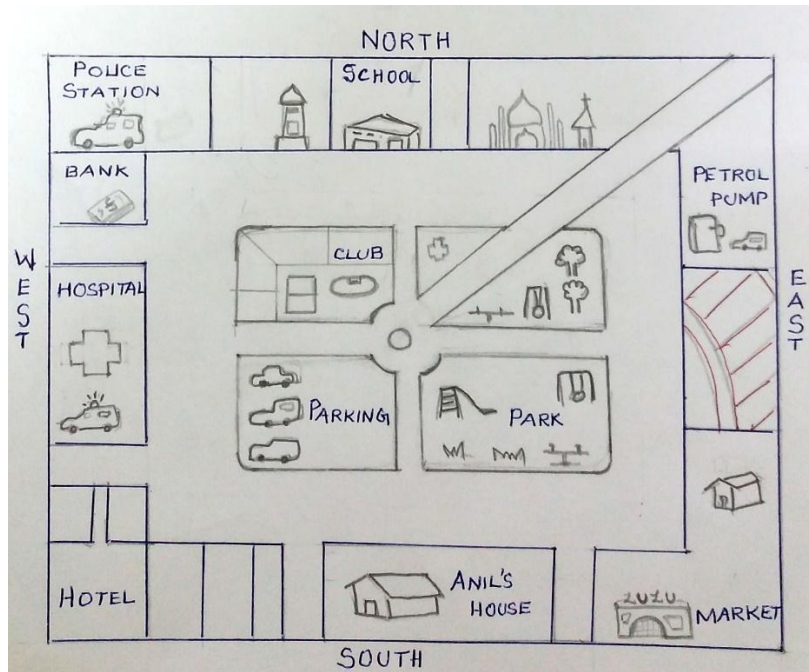
Cycle-rickshaw

Bus

Bullock-cart


Run on petrol	Pulled by man	Pulled by animals
_____	_____	_____
_____	_____	_____

III Observe the picture carefully and answer the following questions:-



1. Name two places found in the east direction. \_\_\_\_\_
2. Bank and hospital are in the \_\_\_\_\_ direction.
3. Whose house is in the south direction? \_\_\_\_\_
4. Colour the two places found in the north direction.

IV Join the dots and identify the picture. Name it in the space given below and colour.



\_\_\_\_\_

