



INDIAN SCHOOL DARSAIT
TERM I MAY 2017
PERIODIC TEST 1
EVS



Class: IV Sec:
Date: 30.05.17
Name:

Max.Marks:20
Time:1 hr
Roll No:.....

General Instructions

1. All the questions are compulsory
2. Answer all questions in a separate paper

Q.I Choose the correct answer 4 X ½ = 2


- a) The plan of a house is made by an _____.
a) Engineer b) Architect c) Electrician d) Doctor
- b) The spice that is used to heal the wounds is _____.
a) Turmeric b) Cinnamon c) Clove d) Chilli
- c) Loud noise harms our _____.
a) Eyes b) Nose c) Ears d) Tongue
- d) Cutting crops when they are ripe is called _____.
a) Manuring b) Harvesting c) Sowing d) Ploughing



Q.II Unscramble the people involved in the construction of a house from the box given below 4 X ½ = 2

- a) A _____ lays bricks and plasters walls.
- b) An _____ fits wires and pipes.
- c) An _____ supervises the construction of a house.
- d) A _____ fix water pipes and tapes.

MERBUPL	ONSAM	IACNRTIEEL	GNIEEREN
---------	-------	------------	----------

Q.III Identify the picture 4 X ½ = 2





Q.IV Define the following

2 X 1 = 2

- a) Sowing
- b) Sense organs

Q.V Give reason

2 X 1 = 2

- a) Farmers add manure and fertilizers to the soil.
- b) Do not rub your eyes with dirty hands or cloth.

Q.VI Answer the following

4 X 2 = 8

- a) How should we take care of our nose and eyes ? (write 2 points each)
- b) How do farmers plough the field ?
Which vehicle is used by the farmers nowadays to plough the fields ?
- c) What are slums ?
Why are slums prone to diseases ?
- d) Write two differences between Kachcha house and Pakka house.

Q.VII Draw any 4 sense organs and write their functions

4 X ½ = 2