



INDIAN SCHOOL DARSAIT
ENVIRONMENTAL SENSITIVITY - EVALUATION II
MONTH 2016
ENVIRONMENTAL STUDIES



Grade: IV Div:

Date:.....

Name:.....

G:.....

Roll No:.....

I Fill in the blanks:

1. The chief bank in India is _____.
2. The motto inscribed on the national emblem is _____.
3. The _____ colour on a map represent mountains and hills.
4. A _____ is a place (like temple, school or cinema hall) in a sketch that can be easily recognised.

II Identify the pictures.



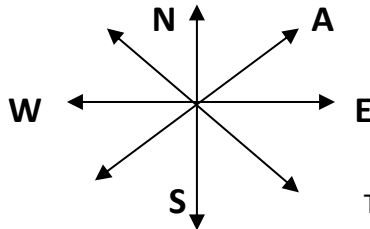
1.

Name the currency. _____



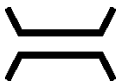
2.

The _____ of India.



3.

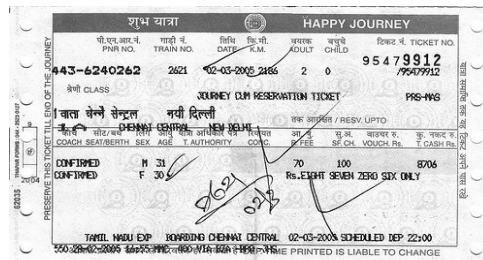
The sub direction in the place of A : _____.



4.

This symbol on a map stands for - _____.

III Complete the following:



1. Name of the train : _____
2. Date of travel : _____
3. Place of boarding : _____
4. Number of people travelling : _____

ISD/EVS/IV/Env.Sens/2016-17

IV In a map Scale is given as:

1 cm = 250 kilometres

a) What does it mean?

b) What is meant by scale of a map?

V



A list of symbols used in the map is given. Look carefully and write.

	House
	Tree
	Handpump
	Gate
	Well
	Bus stop
	Post office
	Hospital
	Shop
	School

How many houses are there in the map? _____

How many shops are there in the map? _____

How many trees are there in the map? _____

152