



INDIAN SCHOOL DARSAIT
TERM I - MAY 2018
PERIODIC TEST 1
MATHEMATICS



Class: III Sec:
Date: 29 - 05 - 2018
Name:

Max.Marks:20
Time:1 hr
Roll No:.....

(6X ½ =3)

Q.I Fill up the blanks.

- a) Write in words:3,087 - _____
- b) $3070 + 0 =$ _____
- c) 1000 more than 3496 is _____
- d) Number after 7909 is _____
- e) Number between 2999 and 3001 is _____
- f) The sum of 2000 and 3000 is _____

Q.II Choose the correct option.

(6x ½ = 3)

- a) The odd number among the following is _____
(i) 1500 (ii) 2383 (iii) 2154 (iv) 3086
- b) The greatest number using the digits 3,7,5,0 is _____
(i) 3750 (ii) 7350 (iii) 7053 (iv) 7530
- c) The place value of 8 in 8,196 is _____
(i) 800 (ii) 8100 (iii) 8000 (iv) 8190
- d) $320 + 440 = 440 +$ _____
(i) 320 (ii) 440 (iii) 7600 (iv) 670

e) Find the missing digit is

$$\begin{array}{r} 7\ 3\ 4\ 8 \\ +\ 2\ \square\ 5\ 1 \\ \hline 9\ 9\ 9\ 9 \end{array}$$

- (i) 6 (ii) 4 (iii) 8 (iv) 7

f) _____ + 7005 = 7006

- (i) 0 (ii) 5 (iii) 1 (iv) 6

Q.III Do as directed.

(7X2=14)

a) Write the numeral for:

i) $3000 + 500 + 6 =$ _____

ii) Seven thousand six hundred forty five = _____

b) i) $3401 + 5674 =$ _____

ii) $2385 + 4703 =$ _____


c) Compare and put the correct sign (< , > , =)

i) 4996 _____ 4956

ii) 3999 _____ 4000

d) Arrange the numbers and add: 98 , 4367 , 342










e) Colour all the even numbers with blue to help the bee to find her house.



345	6005	26	4404	3092
2008	362	600	477	468
407	455	213	861	542



f) The following pictograph shows how a class of children travel to school. Read and understand the pictograph to answer the following questions.

Means of transportation	Number of students
 walk	
 School bus	
 bicycle	
 car	
 = 2 children	

i) How many children travel by bicycle? _____

ii) Which is the most popular means of transportation? _____

iii) How many children travel by car? _____

iv) Which is the least popular means of transport? _____

g) A farmer has 1650 mango trees and 1536 apple trees in his garden. How many trees are there altogether?
