



INDIAN SCHOOL DARSAIT
MCQ WORKSHEET – EVALUATION II
JANUARY 2017



MATHEMATICS

Grade: II Div:













Date:.....

Name:.....

G:

Roll No:.....

I. Choose the correct answer and fill in the blanks:

- 1) A cylinder has _____ faces.
(a) 2 (b) 3 (c) 1 (d) 4
- 2) The length of a pin is measured in _____.
(a) gram (b) litre (c) centimetre (d) millilitre
- 3) _____ is used to measure large quantities of liquid.
(a) ℓ (b) m (c) $m\ell$ (d) g
- 4) An object that can roll and slide is a _____.
(a) marble (b) book (c) coin (d) scissors
- 5) The Christmas tree is an example of a _____.
(a) sphere (b) cylinder (c) cuboid (d) cone
- 6) The unit used to measure the weight of a horse is _____.
(a) kg (b) m (c) g (d) cm
- 7) The quantity of coffee in a cup is expressed in _____.
(a) gram (b) metre (c) millilitre (d) centimetre
- 8) A match-box represents the shape of a _____.
(a) cube (b) cone (c) cuboid (d) cylinder
- 9) Which figure comes next in the pattern      _____
(a)  (b)  (c)  (d) 
- 10) The container that can hold more than 1 litre of oil is a _____.
(a)  (b)  (c)  (d) 