



INDIAN SCHOOL DARSAIT
MATHEMATICS
TIME
PRACTICE WORKSHEET



Class :III Div:

Date:.....

Name:.....

Roll No:.....

Q. 1 Fill up the blanks.

1. In a leap year, February has _____ days .
2. The longer hand of the clock shows _____ and shorter hand shows _____.
3. _____ months in a year have 30 days.
4. Minute hand of a clock on 6 means _____ minutes have passed.
5. July and August have _____ days.

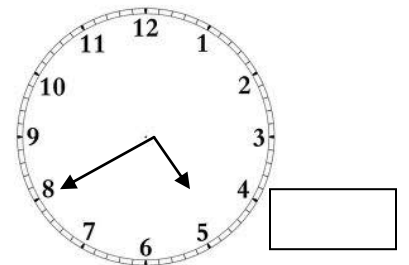
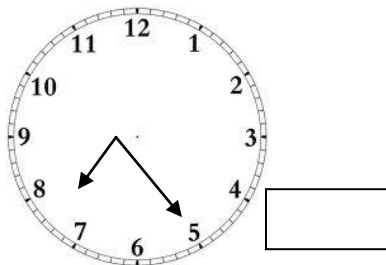
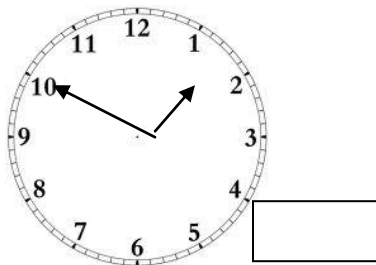
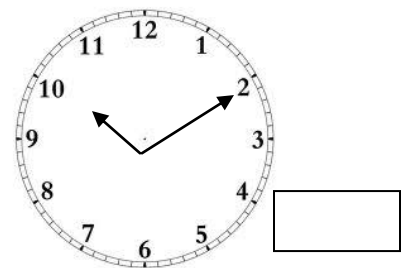
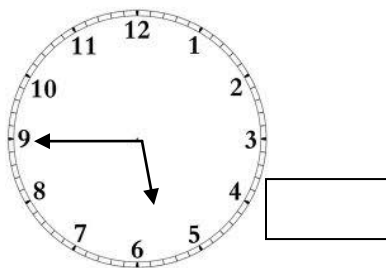
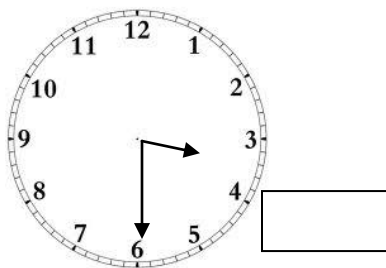
Q.2 Cross out the incorrect one.

- | | |
|-----------------------------|-----------------------|
| 1. To eat breakfast | 10 minutes / 10 hours |
| 2. To watch a movie | 2 minutes / 2 hours |
| 3. Traffic lights to change | 2 minutes/ 20 minutes |
| 4. Your summer vacation | 50 years / 50 days |

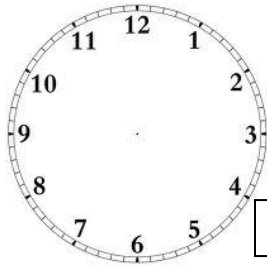
Q.3 Write the number of the days in the following months.

- | | | |
|-------------------------|--------------------------|---------------------|
| 1. November - ____ days | 2. September - ____ days | 3. June - ____ days |
|-------------------------|--------------------------|---------------------|

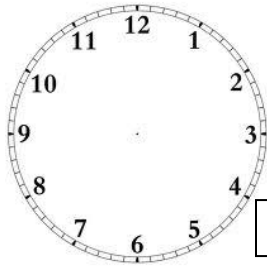
Q. 4 Write the time.



Q. 5 Draw hands of the clock for the given time.



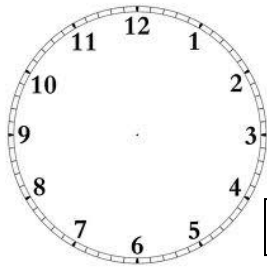
2 : 40




8 : 10



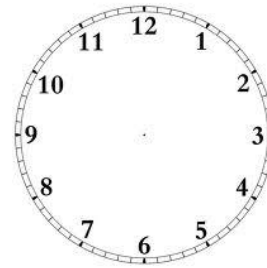
7 : 50



11 : 30



6 : 05



4 : 20

Q.6 Read the calendar and fill up the blanks.

SEPTEMBER 2017						
SUNDAY	MONDAY	TUESDAY	WEDNESDAY	THURSDAY	FRIDAY	SATURDAY
					1	2
3	4	5	6	7	8	9
10	11	12	13	14	15	16
17	18	19	20	21	22	23
24	25	26	27	28	29	30

1. The calendar is of the month _____ for the year _____.
2. The first day of the month is on _____. (day of the week)
3. There are _____ Sundays in the month.
4. Colour the 2nd Friday. Write the date: _____.
5. If today is 12th, which day was it yesterday? _____