



INDIAN SCHOOL DARSAIT
 ACTIVITY WORKSHEET EVALUATION - 2
 NOVEMBER 2016
 MATHEMATICS



Grade: II Div:

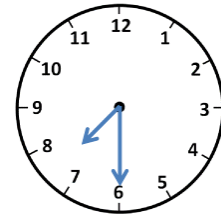
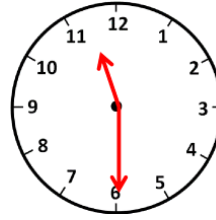
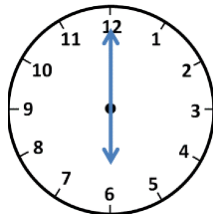
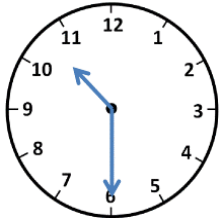
Date:.....

Name:.....

G:

Roll No:.....

I) Match the clock with the correct time:





half past 11

10 : 30

half past 7

6 o' clock



II) Look at the time and draw the hands on the clock. Also number the activities in sequence in the circle given below:



7 : 30



half past 9



5 o' clock



6:00



III) List of items and their prices are given below. Help Ann to buy the objects by filling the blanks.



₹ 30



₹ 10



₹ 23



₹ 8



₹ 15



1) With ₹ 25, Ann can buy a _____ and a _____.

2) With ₹ 53, she can buy a _____ and a _____.

3) A bat and a juice can be bought for ₹ _____.

IV) Draw the least number of notes and coins needed to buy a scooter in the box.



₹ 512