



INDIAN SCHOOL DARSAIT
 MATHEMATICS
 NUMBERS UP TO 200
 PRACTICE WORKSHEET



Class: II Sec:

Date:.....

Name:.....

Roll No:.....

I. Compare the numbers with $<$, $>$ or $=$ sign :

a) 174 _____ 147

b) 190 _____ 200

c) 154 _____ 154

d) 165 _____ 138

e) 120 _____ 62

f) 184 _____ 185

II. Fill in the blanks:

a) The place value of 1 in 128 is _____ .

b) The position of 'M' in the word 'SEPTEMBER' is _____.

c) 1 hundred + 9 ones is _____.

d) $100 + 60 + 7 =$ _____.

e) In 154, the digit '5' is in the _____ place.

III. Write the number names for the following :


a) 145 - _____

b) 107 - _____

c) 116- _____

d) 180 - _____

IV. Pair the following to find if they are odd or even:

a)  _____

b)  _____

V. Write the numeral for the given number names :

a) One hundred ninety - _____

b) One hundred seventy four - _____

c) Two hundred - _____

d) One hundred eight - _____

VI. Write the numbers in increasing order:

a) 192, 139, 158 - _____

b) 178, 174, 176 - _____

c) 150, 154, 65 - _____

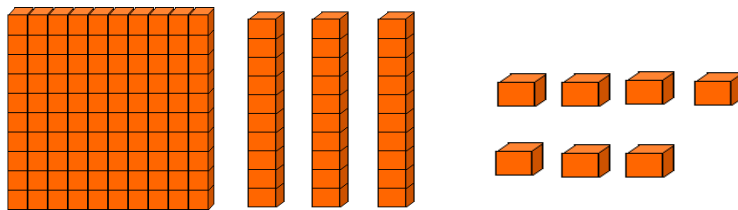
VII. Write the numbers in decreasing order:

a) 160, 116, 167 - _____

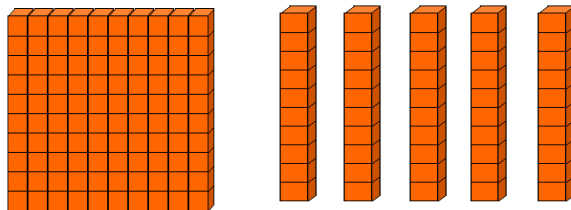
b) 145, 138, 172 - _____

c) 184, 180, 183 - _____

VIII. Form the numbers :



a) _____ hundred + _____ tens + _____ ones = _____



b) _____ hundred + _____ tens + _____ ones = _____