



INDIAN SCHOOL DARSAIT
TERM I- SEPTEMBER 2018
HALF YEARLY EXAMINATION
MATHEMATICS



Class: II Sec:
Date: 27.09.2018
Name:

Max.Marks: 25
Time: 1 hr
Roll No:.....

Q.I Fill in the blanks: 5 X ½ = 2 ½

- a) 500 ml + _____ ml = 1000 ml
- b) 8 taken away from 40 is _____.
- c) February has _____ days in a leap year.
- d) Raj bought 1kg of apples today. We can also say that it weighs _____ g
- e) The weight of an apple is measured in _____.

Q.II Do as directed:

a) Write the number names for the following. 2 X ½ = 1

(i) 200 - _____

(ii) 148 - _____

b) (i) Write the numbers in ascending order. 2X ½ = 1

138, 130, 135 - _____

(ii) Write the numbers in descending order.

174, 186, 129 - _____

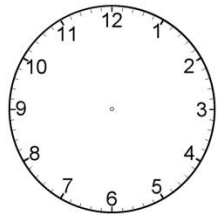
c) Write the numeral for : 1X ½ = ½

(i) One hundred sixty four - _____

Q.III Draw the hands of the clock to show the time:

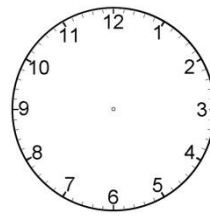
$2 \times \frac{1}{2} = 1$

a)



7:15

b)



9 o'clock

Q.IV Write whether the given statements are true or false :

$5 \times \frac{1}{2} = 2 \frac{1}{2}$

a) Length of a wall is measured in kilogram.

b) There are 14 days in two weeks.

c) Water in a tub is measured in litre.

d) December is the first month of the year.

e) The place value of 1 in 190 is 100.

Q.V Subtract :

a)

	T	O
	5	9
-		4

b)

	T	O
	8	5
-	1	5

$2 \times 1 = 2$

c)

	T	O
	4	2
-	1	7

d)

	T	O
	6	1
-	3	8

$2 \times 1 \frac{1}{2} = 3$

Q.VI Match the following:

$5 \times \frac{1}{2} = 2 \frac{1}{2}$

- | | |
|------------------|------------------|
| i) January 26 | a) Christmas |
| ii) 365 days | b) One day |
| iii) December 25 | c) Republic day |
| iv) 24 hours | d) One year |
| v) September 5 | e) Teacher's day |

Q.VII Choose the correct answer from the brackets :


$4 \times \frac{1}{2} = 2$

- a) Your father gets petrol in his car in _____.
- (i) gram (ii) litre (iii) kilogram (iv) metre
- b) The difference between 37 and 5 is _____.
- (i) 32 (ii) 37 (iii) 42 (iv) 35
- c) 1 hundred + 0 tens + 8 ones = _____.
- (i) 110 (ii) 108 (iii) 180 (iv) 100
- d) The standard unit of measurement of mass is _____.
- (i) millilitre (ii) kilogram (iii) litre (iv) metre

Q.VIII Write the time shown on the clocks in two different ways :

$4 \times \frac{1}{2} = 2$





Q.IX Read the question carefully and solve it:

1 X 2 = 2

- a) There were 79 people in a bus. At the first bus stop 30 people got down. How many people were left in the bus?

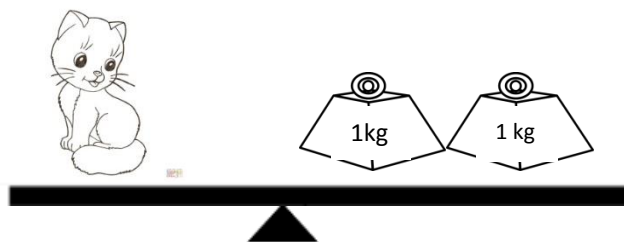
Ans : _____

T	O

Q.X Write the total weight of the following :

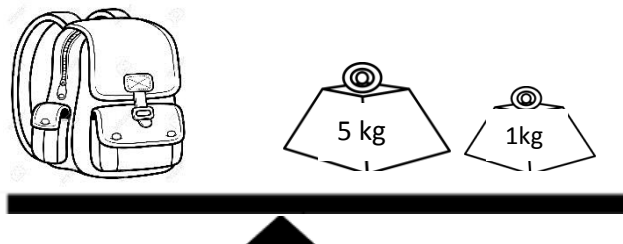
2 X ½ = 1

a)



_____ kg

b)



_____ kg

Q.XI Guess the measurement and circle the right answer:

4 X ½ = 2

- a) Capacity of a soup bowl : 250 l 250 ml
- b) Weight of a baby : 6 g 6 kg
- c) Amount of medicine in a teaspoon : 5 ml 5 l
- d) Height of a building : 12 m 12 cm