



INDIAN SCHOOL DARSAIT
TERM I – SEPTEMBER 2017
HALF YEARLY EXAMINATION
MATHEMATICS



Class : II Sec:
Date : 26.09.2017
Name :

Max.Marks:25
Time :1 hr.
Roll No:.....

Q.I Match the following:-

6 X ½ = 3

- | | |
|----------------------------------|-----------------------|
| 1) 1 hundred + 7 ones | a) Candle |
| 2) 5 taken away from 93 | b) 6:30 |
| 3) The shape of a cone | c) 107 |
| 4) The short form of half past 6 | d) 88 |
| 5) 1 rupee | e) 1 day |
| 6) 24 hours | f) Four 25 paise coin |
| | g) Birthday cap |

Q.II Choose the correct answer from the bracket and write in the space given:-

5 X ½ = 2½

- a) 1 less than 100 is _____
- | | | | |
|--------|-------|--------|--------|
| a) 109 | b) 99 | c) 100 | d) 111 |
|--------|-------|--------|--------|
- b) I am a solid shape. I have no corners and no edges. Who am I?
- | | | | |
|---------|-----------|---------|-----------|
| a) cube | b) circle | c) cone | d) sphere |
|---------|-----------|---------|-----------|
- c) In a leap year, February has _____ days.
- | | | | |
|-------|-------|-------|-------|
| a) 28 | b) 29 | c) 30 | d) 31 |
|-------|-------|-------|-------|
- d) _____ paise make 1 rupee.
- | | | | |
|-------|-------|--------|-------|
| a) 10 | b) 50 | c) 100 | d) 25 |
|-------|-------|--------|-------|

e) The outline of a mobile phone is _____.

- a) triangle b) circle c) rectangle d) square

Q.III Write whether the following statements are True or False:-

$4 \times \frac{1}{2} = 2$

- a) Ten 10 paise coins make 1 rupee. _____
- b) A ball can roll and slide. _____
- c) Any number minus by itself we get the same number. _____
- d) If today is Wednesday, yesterday was Tuesday. _____

Q.IV Add/Subtract:-

$3 \times 1 = 3$

a)

	T	O
	6	0
+	1	8

b)


	T	O
	9	4
-	5	4

c)

	T	O
	7	7
-	3	2


Q.V Colour the objects that can roll and slide:-


$1 \times 1 = 1$



Q.VI Complete the pattern:-

$1 \times 1 = 1$

a)  _____

b)  _____

Q.VII How much money does this make?

$2 \times 1 = 2$

a)



= ₹ _____

b)



= ₹ _____

Q.VIII Solve the following:-

$3 \times 1\frac{1}{2} = 4\frac{1}{2}$

a)

	T	O
	9	0
-	4	6

b)

	T	O
	3	5
+	2	7

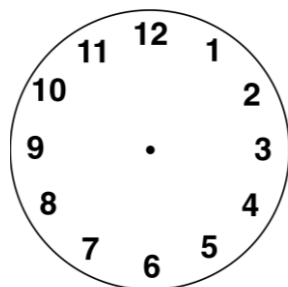
c)

	T	O
	6	2
-	3	5

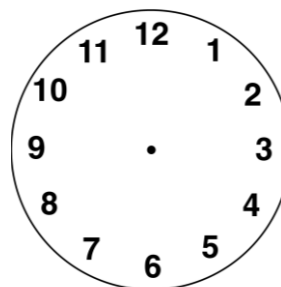
Q.IX Draw the hands of the clock to show the time:-

$2 \times 1 = 2$

Four o'clock



Half past eight

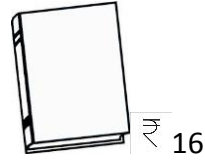


Q.X

Solve the following:-

2 x 2 = 4

a)



Before the school reopened, Jiya bought the above things. How much did she spend altogether?

	T	O

Ans: _____

b) Out of 51 students in the class, only 29 were present on a rainy day.

How many were absent on that day?

	T	O

Ans: _____