



INDIAN SCHOOL DARSAIT
TERM I – SEPTEMBER 2017
HALF YEARLY EXAMINATION
MATHEMATICS



Class: I Sec: _____
Date: 26.09.2017
Name: _____

Max.Marks:25
Time:1 hr.
Roll No: _____


I Fill in the blanks

6 x ½ = 3

- a The Long hand is the _____
- b Write the place value of 2 in 28 _____
- c The answer in addition is called as _____
- d $6 + 3 = 3 + \underline{\hspace{1cm}}$
- e 7 tens = _____
- f Count and write the number of lights in your class room _____

II Match the following

6 x ½ = 3

- | | |
|--|----------------------|
| a) Sunday | 23 |
| b) $4 + 4$ | comes before Monday |
| c) 2 tens and 3 ones | 8 |
| d) Friday | 4 |
| e) $14 + 0$ | comes after Thursday |
| f)  | 14 |

III Think before you write

- a Do the number combinations.

2 x 1 = 2

$3 + 4 = \underline{\hspace{1cm}} + \underline{\hspace{1cm}}$

$2 + 6 = \underline{\hspace{1cm}} + \underline{\hspace{1cm}}$

- b Complete the following

2 x 1 = 2


34 = _____ tens and _____ ones

69 = _____ tens and _____ ones

c Write the correct time in two ways


$2 \times 1 = 2$









d How many of each? Count and write in the given boxes

$4 \times \frac{1}{2} = 2$



- a) 
- b) 
- c) 
- d) 

e Add the following

$2 \times 1 = 2$

(a)

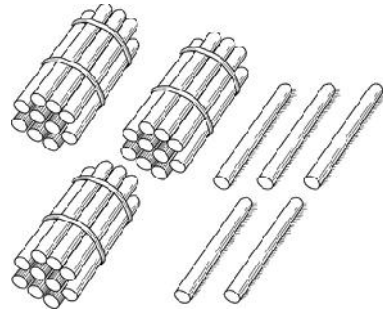
	T	O
		7
+		5

(b)

	T	O
	1	0
+		6

f Count the tens and ones and write in the given blanks

2 x 1 = 2



IV Solve the following

2x1 ½ = 3

- a) Rahul had 6 pens. Father gave him 2 more.
How many pens does Rahul have in all?

Ans: _____

T	O


- b) There were 14 birds on a tree, 3 more joined them.
How many birds are there in all?

Ans: _____

T	O

V

1 x 2 = 2



a. Count and write how many of each in the given boxes

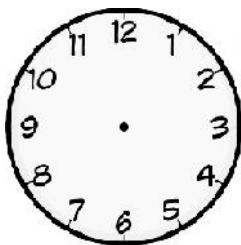


b. Draw the object which is more in number _____

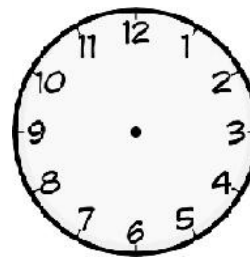
c. Draw the object which is less in number _____

VI Draw the hands on the clocks below to show the time

2 x 1 = 2



01:00



08:00