



INDIAN SCHOOL DARSAIT
TERM I – SEPTEMBER 2017
SAMPLE PAPER
MATHEMATICS



Class: II Sec:

Name:

Date :.....

Roll No:.....

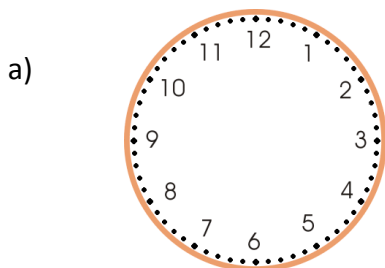
Q.I Fill in the blanks:

- a) _____ should be subtracted from 61 to get 55.
- b) There are _____ days in a week.
- c) 9 rupees and 50 paise is written as _____.
- d) $46 + 32 =$ _____.
- e) We read 6:00 as _____.
- f) A birthday cap represents the shape of a _____.


Q.II Write whether the statements are true or false:

- a) Teacher's day is celebrated in September. _____
- b) A balloon represents the shape of a cuboid. _____
- c) If we take away zero from any number, we get zero. _____
- d) Five coins of ₹ 2 make ₹ 10. _____

Q.III Draw the hands of the clock to show the time:



half past 7



2 : 00

Q.IV Add/Subtract:

a)

T	O
4	3
2	1

b)

T	O
5	8
3	2

-

c)

T	O
7	0
2	6

+

Q.V Complete these pattern sequences:

a) $\Rightarrow \Downarrow \Leftarrow \Rightarrow \Downarrow$ _____

b) $\star \diamond \star \diamond \star$ _____

c) $\oplus \otimes \ominus \oplus$ _____

d) 111, 122, 133, _____, _____

Q.VI Count and write how much money it is:

a)  ₹ _____

b)  ₹ _____

Q.VII Solve:

a)

	T	O
	8	2
-	2	9


b)

	T	O
	4	6
+	3	8

c)

	T	O
	9	1
-	5	4

Q.VIII Choose the correct answer:

a) The number of slanting lines in the figure  is _____.


- (i) 4 (ii) 6 (iii) 8 (iv) 0

b) Time taken by the minute hand to go once around the clock is _____.

- (i) 1 hour (ii) 1 day (iii) 1 minute (iv) 5 minutes

c) 10 less than 69 is _____.

- (i) 49 (ii) 79 (iii) 68 (iv) 59

d) The shape we get after drawing the outline of  is _____.

- (i) square (ii) circle (iii) triangle (iv) rectangle

e) Eight rupees fifty paise is written as _____.

- (i) ₹ 8.05 (ii) ₹ 8.50 (iii) ₹ 5.80 (iv) ₹ 8.00

Q.IX Read the problems carefully and solve them:

- a) A balloon seller had 65 balloons. Out of which 37 balloons burst. How many balloons are remaining with him?

T	O

Ans: _____

_____.

- b) Ankur bought a chocolate for ₹ 32 and a sandwich for ₹ 58. How much money did he spend?

T	O

Ans: _____

_____.