



INDIAN SCHOOL DARSAIT
MATHEMATICS
TIME, MONEY
PRACTICE WORKSHEET



STD : II SEC :

Date :

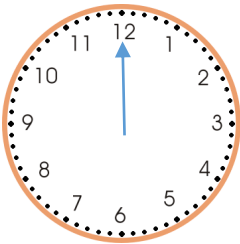
Name:

Roll No:

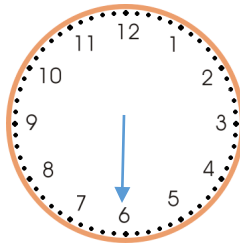
I) Fill in the blanks :

- a) 100 paise makes _____.
- b) 2 hours after 9:00 is _____.
- c) Children's day is celebrated in the month of _____.
- d) _____ coins of ₹ 2 make ₹ 10.
- e) We also read the time 3:30 as _____.

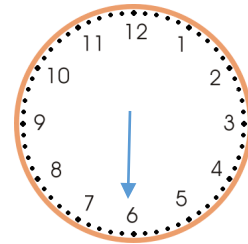
II) Draw the hour hand to show the time given:



7 : 00



half past 9



12 : 30

III) Vani wants to buy shoes. Draw the least number of notes and coins needed in the box.



₹ 160

IV) Write how much money does this make:



₹ _____



₹ _____

V) Write the time shown on the clock in two ways:







VI) Solve the following:

a) Suman bought apples for ₹ 52 and mangoes for ₹ 45. How much did he spend?

T	O

Ans: _____.

b) Reena had ₹ 78 to buy a textbook. The book cost only ₹ 57. How much is left with her?

T	O

Ans: _____.