



INDIAN SCHOOL DARSAIT
TERM I-SEPTEMBER 2018
HALF YEARLY EXAM
MATHEMATICS



Class: I Sec:
Date: 27.09.2018
Name:

Max.Marks:25
Time:1 hour
Roll No:.....

Q I. Do as directed:

A. Write the numbers from smallest to biggest. (2x1=2)

a. 22, 32, 12, 42

b. 13, 49, 28, 30

B. Write the numbers from biggest to smallest. (2x1=2)

a. 43, 27, 11, 35

b. 39, 19, 9, 29

C. Write in the expanded form. (2x1=2)

a. $43 = \underline{\hspace{2cm}}$ tens + $\underline{\hspace{2cm}}$ ones

b. $15 = \underline{\hspace{2cm}}$ tens + $\underline{\hspace{2cm}}$ ones

D. Write the number name. (2x1=2)

a. 40 - _____

b. 25 - _____


Q II. Fill in the blanks.

(4x ½=2)

- a. _____ comes between 26 and 28.
- b. 5 tens = _____
- c. A triangle has _____ sides.
- d. The number that comes before 42 is _____.









Q III. Match the following.

(6X ½=3)

- a) Thirty six
- b) 3 tens and 2 ones
- c) 40
- d) Circle
- e) $5+0=$
- f) $7+3=$
- i) 
- ii) $3+7$
- iii) 36
- iv) 4 tens
- v) 32
- vi) 5

Q IV. Draw the next two pictures to continue the pattern.

(2x1=2)

Q V. Add the following.

(4x1=4)

	T	O
		7
+		9

	T	O
	1	2
+		5

	T	O
	1	1
+		8

	T	O
		6
+		0

Q VI. Solve

(2 x 1 ½ = 3)

- a. Ravi has 8 crayons. Rani has 7 crayons.

How many crayons do they have in all ?

Ans. _____

	T	O

b. In a fruit basket there are 13 apples and 6 bananas.

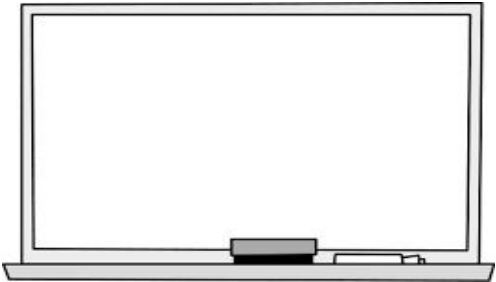

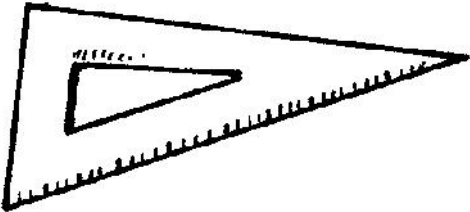
How many fruits are there in the basket?

Ans: _____

	T	O

Q VII. Identify the shape of the object and write its name.

(3x1=3)

	_____
	_____
	_____