



INDIAN SCHOOL DARSAIT
 MATHEMATICS
 SHAPES AND PATTERNS
 PRACTICE WORKSHEET



Grade: II Div:

Date:.....

Name:.....

Roll No:.....

I What plane shape will you get from the outline of the following?

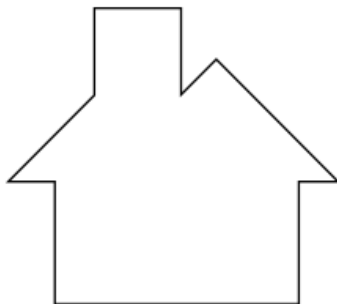








II Count and write the number of different types of lines.





1. Standing lines

2. Sleeping lines

3. Slanting lines

III Tick the objects that can roll and slide:-



IV Write the name of the following shapes and colour them as indicated:-


Cube- Yellow

Cuboid- Blue

Cone – Red

Sphere- Orange

Cylinder- Green





III Complete the pattern:-



