



INDIAN SCHOOL DARSAIT
 MATHEMATICS
 MEASUREMENT
 PRACTICE WORKSHEET



Grade: I Div : _____

Date : _____

Name : _____


Roll No : _____

I. Ring the one that is :

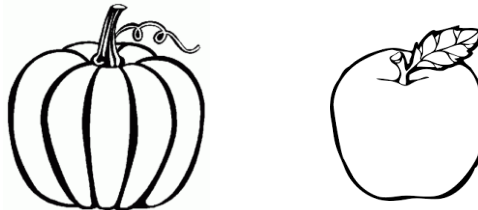
a) Big



b) Tall

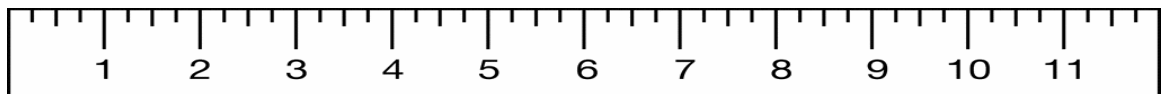


c) Heavy

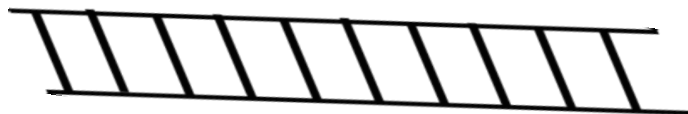


II. How long are these objects?

a)




About



_____ clips.

b)



About _____ crayons.

III. Find out these by yourself.

a) Your maths book : _____ fingers.

b) Your table : _____ handspans.

IV. Find the height of the given objects by counting the square boxes.

a)



a) _____ squares long.

b) _____ squares long.

b)




V. How heavy is each object?

a)



3 apples weigh as much as _____ mangoes.

b)



____pencils weigh as much as 2 sandwich.