



INDIAN SCHOOL DARSAIT
 MATHEMATICS
 TIME AND MONEY
 PRACTICE WORKSHEET



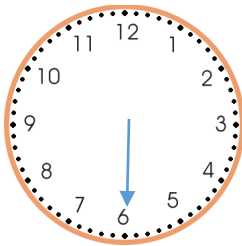
Grade: II Div:

Date:.....

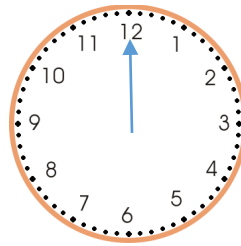
Name:.....

Roll No:.....

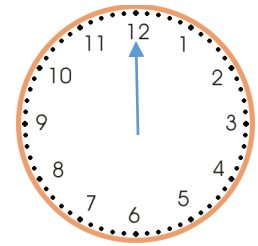
I) Draw the hour hand to show the time:



Half past 1



12:00



5 o' clock

II) For each clock, you need to either draw the hands or write the time:

		Half past 10
1 o'clock		Half past 3

III) Simi wants to buy a watch. Draw the least number of notes and coins needed in the box.



₹ 155



IV) Tick the coins needed to buy the following objects:

 ₹ 15			
 ₹ 7			

V) Find how much each child has:



Sam has ₹ _____



Veena has ₹ _____