



INDIAN SCHOOL DARSAIT
TERM II- MARCH 2018
REVISION
MATHEMATICS



Class: II Sec:

Date:

Name:

Roll No:.....

I. Fill in the blanks:

- a) 4 groups of 6 are _____.
- b) 5 more than 57 is _____.
- c) There are _____ hours in 2 days.
- d) $800 + 70 + 4 =$ _____.
- e) Write the missing number: $80 - \square = 30$

II. Add / Subtract:

a)

	H	T	O
		6	4
-		3	0

b)

	H	T	O
	6	3	6
-	2	1	0

c)

	H	T	O
		8	2
+		7	5

d)

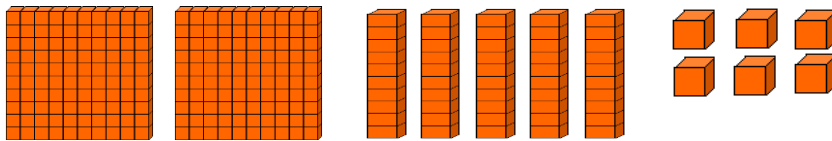
	H	T	O
		5	3
+		6	9

III. Write whether the given statements are True or False:

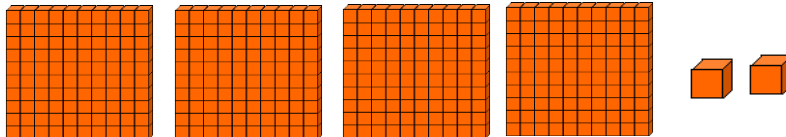
- a) 646 is greater than 649. _____
- b) 3 times 12 = 2 times 13. _____
- c) 5 added to 26 gives 31. _____
- d) In the number 446, the place value of 4 is same in both the places. _____
- e) There are 12 legs for 3 cats. _____

IV. Do as directed:

a) Form the numbers :

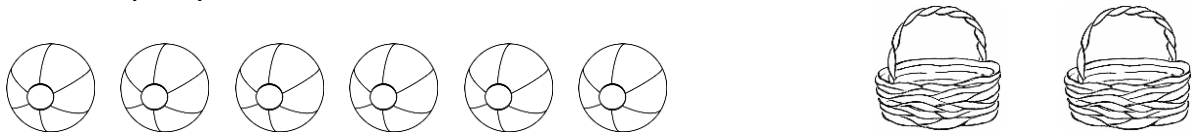


i) _____ hundreds _____ tens _____ ones = _____




ii) _____ hundreds _____ tens _____ ones = _____

b) Share equally.



6 balls put equally into 2 baskets give _____ in each basket.

c) Put into groups of 5.



10 roses put into groups of 5 gives _____ groups.

V. Rewrite the numbers in the correct place and solve:

a) $523 + 20 + 4$

	H	T	O

b) $769 - 56$

	H	T	O

VI. Find the product:

a)

	H	T	O
		4	2
X			2

b)

	H	T	O
		6	0
X			4

c)

	H	T	O
		2	5
X			3

d)

	H	T	O
		7	8
X			6

VII Read the problems carefully and solve.

a) A fruit seller had 355 mangoes. He sold 150 of them.

How many mangoes are left with him?

	H	T	O
<input type="text"/>			

Ans: _____

b) A mini bus can carry 32 students in one trip. How many students can it carry in

4 such trips?

	H	T	O
<input type="text"/>			

Ans: _____

c) In an orchard, there are 120 mango trees, 36 guava trees and 22 orange trees.

How many trees are there in the orchard?

	H	T	O
<input type="text"/>			

Ans: _____