



INDIAN SCHOOL DARSAIT
TERM II – MARCH 2018
YEARLY EXAMINATION
MATHEMATICS



Class: II Sec:
Date: 08.03.2018
Name:

Max.Marks:25
Time:1 hr.
Roll No:.....

I. Choose the correct answer : 5 X ½ = 2 ½

- a) 46 is 8 more than _____.
a) 28 b) 38 c) 18 d) 54
- b) 5 hundreds + 3 ones is _____.
a) 530 b) 500 c) 503 d) 53
- c) If a shirt has 7 buttons, the number of buttons on 4 shirts is _____.
a) 28 b) 11 c) 14 d) 21
- d) The place value of 6 in the number 967 is _____.
a) 600 b) 60 c) 6 d) 67
- e) 100 less than 856 is _____.
a) 866 b) 756 c) 956 d) 846

II. Fill in the blanks: 5 X ½ = 2 ½

- a) The difference of 25 and 12 is _____.
- b) 7 added to 34 is equal to _____.
- c) _____ means equal sharing.
- d) $899 - \square = 899$
- e) 3 groups of 5 are _____.

III. Solve:

$4 \times 1 = 4$

a)

	H	T	O
	2	6	3
+	1	2	1

b)

	H	T	O
		9	8
-		6	2

c)

	H	T	O
		4	2
X			2



d)

	H	T	O
	5	7	9
-		4	5

IV. Do as directed :

$3 \times 1 = 3$

a) Share equally and find how many candies in each bowl.




_____ candies in each bowl.

b) Compare the numbers with >, < or = sign :

i) 834 ○ 948

ii) 693 ○ 656

c) Make groups of 2.



10 flowers put into groups of 2 gives _____ groups.

V. Add / Multiply:

$1\frac{1}{2} \times 4 = 6$

a)

	H	T	O
		6	3
+		1	9

b)

	H	T	O
		4	9
X			2

c)

	H	T	O
		7	6
+		9	8

d)

	H	T	O
		9	1
X			6

VI. Write the numbers in the correct place and solve :

$1\frac{1}{2} \times 2 = 3$

a) $546 - 23$

b) $450 + 12 + 5$

	H	T	O

	H	T	O

- a) Cost of a book is ₹62. Find the cost of 4 books?

	H	T	O

Ans : _____

- b) There are 85 apples and 72 oranges in a box. How many fruits are there in the box?

	H	T	O

Ans : _____