



INDIAN SCHOOL DARSAIT
TERM II – MARCH 2018
YEARLY EXAMINATION
MATHEMATICS



Class: II Sec:
Date: 08.03.2018
Name:

Max.Marks:25
Time:1 hr.
Roll No:.....

- I Match the following:- $\frac{1}{2} \times 5 = 2\frac{1}{2}$
- | | |
|---------------------------|---------|
| 1) 6 hundreds + 6 ones | a) 0 |
| 2) $64 \times 0 \times 3$ | b) 553 |
| 3) $500 - 200$ | c) 606 |
| 4) 100 less than 653 | d) 1000 |
| 5) 10 hundreds | e) 300 |
- II Circle the correct answer in the options given below:- $\frac{1}{2} \times 5 = 2\frac{1}{2}$
- a) A spider has 8 legs. So 3 spiders have _____ legs.
- a) 24 b) 21 c) 16 d) 32
- b) _____ should be subtracted from 43 to get 38.
- a) 8 b) 4 c) 5 d) 3
- c) Equal sharing means _____ .
- a) addition b) subtraction c) multiplication d) division
- d) $700 + 30 + 8 =$ _____
- a) 703 b) 783 c) 708 d) 738
- e) The place value of 6 in 960 is _____
- a) 60 b) 0 c) 600 d) 6

III

Solve:-

$1 \times 4 = 4$

a)

	H	T	O
	8	7	6
+	1	2	0

b)

	H	T	O
	3	9	4
-		9	0

c)

	H	T	O
		8	9
-		2	8

d)

	H	T	O
		2	3
x			3

IV

Do as directed:

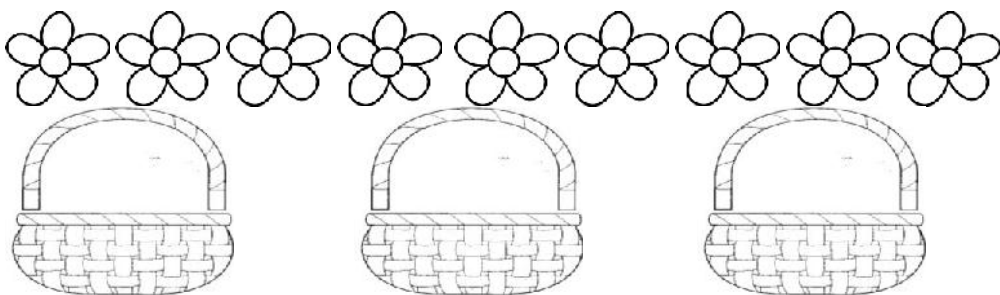
$1 \times 3 = 3$

a) Make groups of 4




12 apples put into groups of 4 gives _____ groups.


b) Share equally and find how many flowers in each basket.



_____ flowers in each basket.

c) Form the number:-

i)  _____

ii)  _____

V Write the numbers in the correct order and solve:-

$1\frac{1}{2} \times 2 = 3$

a) $764 - 53$

	H	T	O
<input type="text"/>			

b) $381 + 15 + 3$

	H	T	O
<input type="text"/>			

VI Add / Multiply :-

$1\frac{1}{2} \times 4 = 6$

a)

	H	T	O
		6	7
+		3	5

b)

	H	T	O
		2	4
x			4

c)

	H	T	O
		2	5
+		9	8

d)

	H	T	O
		4	1
x			6

VII. Read the questions carefully and solve them.

2 x 2 = 4

- a) There are 6 packets of crayons in a box. Each packet has 12 crayons. How many crayons are there in all?

	H	T	O

Ans : _____

- b) Ria has 69 stamps. Raju has 35 stamps. How many stamps do they have together?

	H	T	O

Ans : _____