



INDIAN SCHOOL DARSAIT
MATHEMATICS
MEASUREMENT
PRACTICE WORKSHEET



STD : II SEC :

Date :

Name :

Roll No :

I) Fill in the blanks :

a) The standard unit for measuring length is _____.

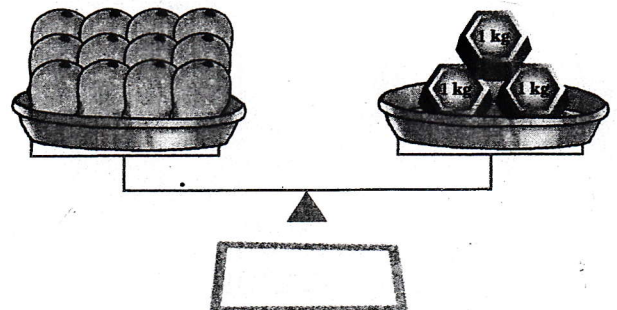
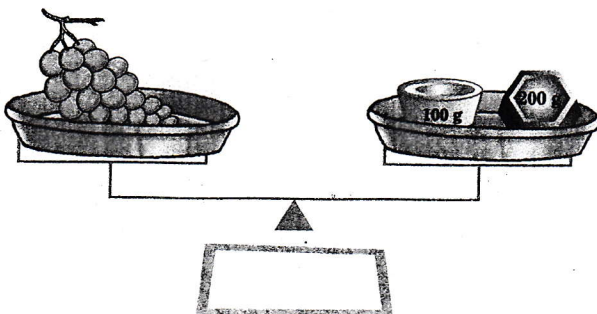
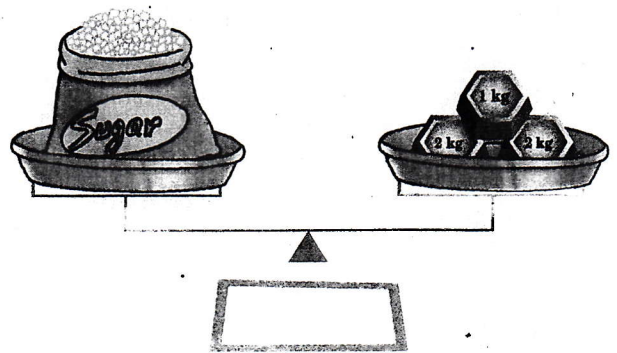
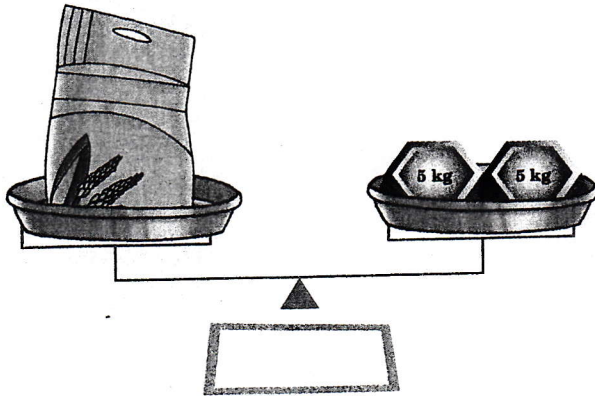
b) $1 \text{ l} = \text{_____ ml}$

c) $1 \text{ kg} = 500 \text{ g} + \text{_____}$

d) $2 \text{ m} = \text{_____ cm}$

e) 'g' is the short form of the unit _____.

II) Write the weight of the following :





ISD/MS/MATH/II/PWS/2017-18

III) Circle the appropriate unit used to measure the objects given below:

- a) Height of a tree (g, mL, m)
- b) Water in a swimming pool (L, kg, mL)
- c) Length of a wall (cm, g, m)
- d) Your weight (L, m, kg)
- e) Capacity of a soup bowl (mL, g, cm)

IV) Colour the objects that hold more than 1 litre of liquid:



V) Draw a caterpillar of length 9 cm and colour it: