



INDIAN SCHOOL DARSAIT  
 TERM II– JANUARY 2018  
 SAMPLE PAPER  
 MATHEMATICS



Class: II Sec: .....  
 Name: .....

Date: .....  
 Roll No:.....

I. Find the product:

a)

X	T	O
		4
		5

b)

X	T	O
		7
		2

II. Match the following :

- |                             |            |
|-----------------------------|------------|
| a) Number after 268         | (i) 50     |
| b) Unit of measuring length | (ii) 12    |
| c) Place value of 5 in 354  | (iii) 269  |
| d) Double of 6              | (iv) metre |

III. Do as directed:

a) Write the repeated addition and multiplication sentence below:



(i) Repeated addition sentence - \_\_\_\_\_

(ii) Multiplication sentence - \_\_\_\_\_

b) (i) Write the numbers in increasing order :

647, 782, 574 - \_\_\_\_\_

(ii) Write the numbers in decreasing order :

835, 892, 864 - \_\_\_\_\_





c) (i) Write the number name of :

358 - \_\_\_\_\_

(ii) Write the numeral for :

Seven hundred thirty - \_\_\_\_\_

IV. The following list shows the favourite game of a group of children. Read the list and answer the questions below.

Games	Number of children
Basketball	
Soccer	
Cricket	
Volleyball	

a) How many children like soccer? \_\_\_\_\_

b) Which game do the children like the most? \_\_\_\_\_

c) How many more children like basketball than volleyball? \_\_\_\_\_

d) How many children like basketball and cricket? \_\_\_\_\_

V. Find the total measurement and circle the correct answer:

a)



50 ml



50 ml

( 200 ml, 100 ml, 50 ml )

b)



6 kg



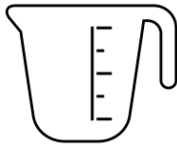
6 kg



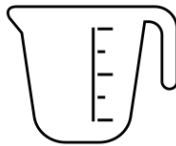
6 kg

( 18 kg, 12 kg, 20 kg )

c)



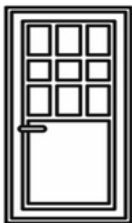
500 ml




500 ml

( 600 ml, 1000 ml, 800 ml )

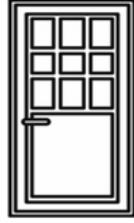
d)



3 m



3 m



3 m

( 12 m, 6 m, 9 m )