



INDIAN SCHOOL DARSAIT  
ENVIRONMENTAL STUDIES  
REVISION WORKSHEET



L-20 SAFETY RULES & L-21 MEANS OF TRANSPORT

Name: .....

Date : .....

Class I & Sec: .....

Roll No : .....

Q I. Tick (✓) the correct answers.

1. What kind of rules should be followed to avoid injuries?

- i. Danger       ii. Safety       iii. Risky


2. We should not play with objects like

- i. Bat       ii. Ball       iii. Scissors

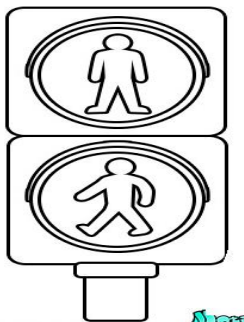
3. The red light of traffic signal says

- i. Stop       ii. Wait       iii. Go






Q II. Put 😊 for pictures that show safe choices and ☹️ for pictures that do not show safe choices.



Q III. Name the following.



Q IV. Find the means of transport in the word grid using the picture clues.



X	S	H	I	P
Y	C	L	O	N
B	O	A	T	Y
T	O	E	O	Z
U	T	F	N	K
V	E	G	G	L
W	R	C	A	R

Q V . Circle the odd one out.

1. bus , car , scooter , ship
2. bicycle , aeroplane , truck , lorry
3. motorcycle , tonga , tractor , bullock cart

QVI. Answer the following.

QI. Write three different means of transport?

Ans.1. \_\_\_\_\_ 2. \_\_\_\_\_  
 3. \_\_\_\_\_

Q2. Write any one rule that we must follow while travelling by any vehicle?

Ans. \_\_\_\_\_  
 \_\_\_\_\_