



INDIAN SCHOOL DARSAIT  
 MATHS PRACTICE WORKSHEET 2017-18  
 MULTIPLICATION READINESS



Name: .....

Date : .....

Class I & Sec: .....

Roll No : .....

I. Match the following.

a. 5+5+5

a. 2 times 6

b. 3+3+3+3+3

b. 3 groups of 5

c. 2+2+2+2+2+2

c. 4 groups of 4

d. 6+6


d. 5 times 3

e. 4+4+4+4

e. 6 groups of 2

II. How many in all ?


a.



+  +  =

\_\_\_\_\_ groups  
 \_\_\_\_\_ in each group  
 \_\_\_\_\_ strawberries in all  
 \_\_\_\_\_ times \_\_\_\_\_ is \_\_\_\_\_




b.



+  +  +  =

\_\_\_\_\_ groups  
 \_\_\_\_\_ in each group  
 \_\_\_\_\_ pears in all  
 \_\_\_\_\_ times \_\_\_\_\_ is \_\_\_\_\_

c.



+

+

=


\_\_\_ groups

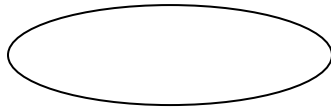
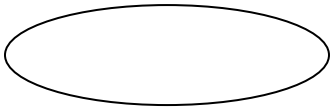
\_\_\_ in each group

\_\_\_ smilies in all

\_\_\_ times \_\_\_ is \_\_\_

III. Draw the shapes to show equal groups and use repeated addition to find how many in all.

a. 2 groups of 4  each.



\_\_\_

+

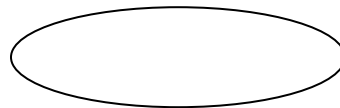
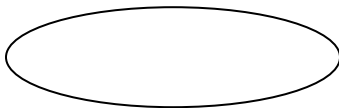
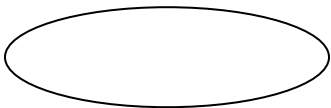
\_\_\_

=

\_\_\_

2 times 4 = \_\_\_

b. 3 groups of 2  of each.



\_\_\_

+

\_\_\_


+

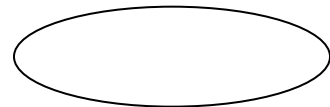
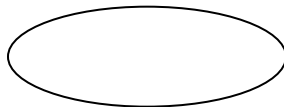
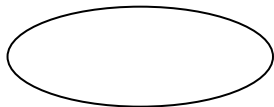
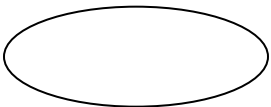
\_\_\_

=

\_\_\_

3 times 2 = \_\_\_

c. 4 groups of 3  each.



\_\_\_

+

\_\_\_

+

\_\_\_

+

\_\_\_

=

\_\_\_

4 times 3 = \_\_\_