



# INDIAN SCHOOL DARSAIT

## DEPARTMENT OF SOCIAL SCIENCE








<b>Subject: Social Science</b>	<b>Topic: Tribes, Nomads, and Settled Communities</b>	<b>Date of Worksheet: 12/11/2017</b>
<b>Resource Person: Mrs. Raji Rajesh</b>		<b>Date :</b>
<b>Name of the Student :</b>	<b>Class &amp; Division : VII</b>	<b>Roll Number :</b>

<b>I</b>	<b>Fill in the blanks.</b>	
1.	In Punjab, the _____ tribe was very influential.	
2.	The _____ were another large and powerful tribe in the north-west who divided into many smaller clans under different chiefs. _____	1
3.	_____, Akbar's famous general, attacked and defeated the Cheros in 1591.	1
4.	Mughal forces under _____, captured many Chero fortresses and subjugated the tribe.	1
5.	The _____ and Santals were among the other important tribes that lived in Orissa and Bengal.	1
6.	The _____ were the most important trader-nomads.	1
7.	_____ used the Banjaras to transport grain to the city.	1
8.	Gonds practiced _____ cultivation.	1
9.	Aman Das, Gond raja of Garha Katanga, assumed the title of _____	1
10.	_____ was an important Gond kingdom according to Akbar Nama.	1
11.	In 1662, the Mughals under Mir Jhumla attacked the _____ kingdom.	1
12.	The new castes emerging within varnas were called _____.	1
13.	Emergence of _____ affected caste system.	1
14.	_____ were historical works written by Ahoms.	1
15.	As tribal states became bigger and stronger, they gave land grants to _____ and _____.	1
<b>II</b>	<b>Name the following</b>	
1.	The Gond Kingdom that comprised 70,000 villages.	1
2.	The forced labour system in an Ahom state.	1
3.	Best known pastoral and hunter-gatherer tribe who were the inhabitants of central Asia.	1
4.	A group of families or households claiming descent from a common ancestor.	1
5.	Those who move over long distances with their animals.	1



INDIAN SCHOOL DARSAIT  
DEPARTMENT OF SOCIAL SCIENCE



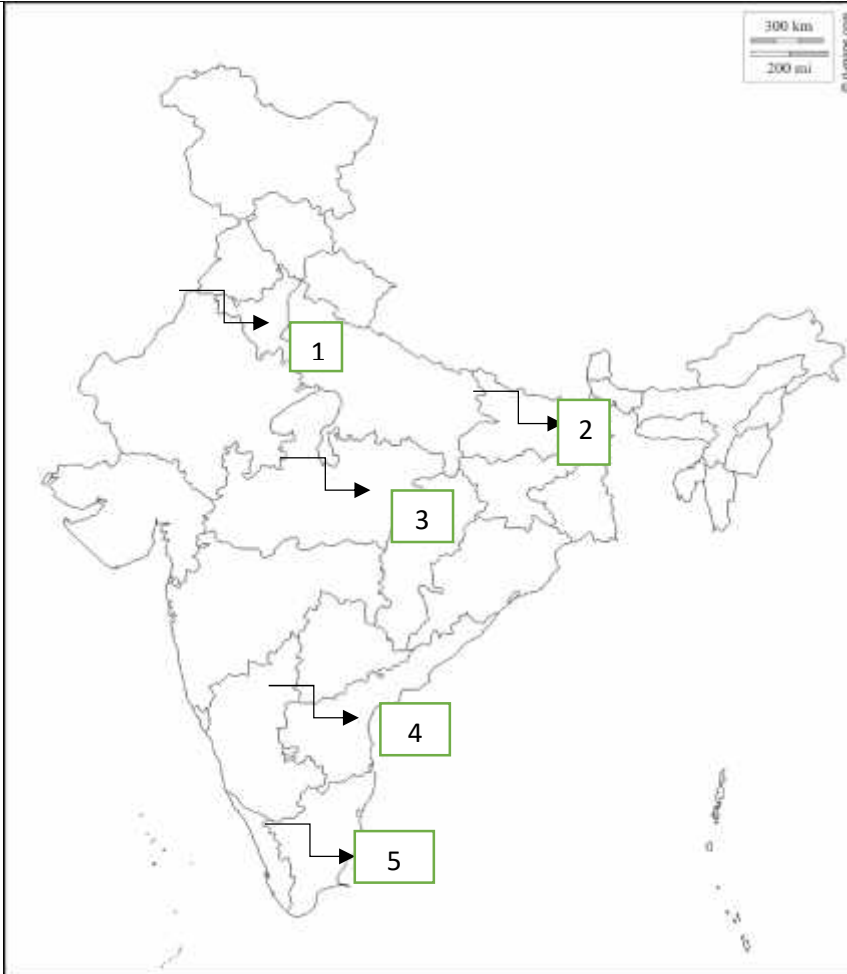
III	<b>Fill in the blanks to complete the timeline below.</b>		
	 <p>1565</p> <ul style="list-style-type: none"><li>• _____</li></ul>  <p>1591</p> <ul style="list-style-type: none"><li>• _____</li><li>• _____</li></ul>  <p>1662</p> <ul style="list-style-type: none"><li>• _____</li><li>• _____</li></ul>		
IV	Observe the pictures and answer the questions that follow	3	
	 <p><b>Rani Durgavati</b></p> <p>THE LIFE OF A BRAVUT PRINCESS WHO BEC QUEEN OF THE GONDE</p>	<p>a. Why is this Gond queen famous?</p> <p>b. Can you think of another queen famed for her bravery? How are their lives similar?</p>	
		<p>a. Identify the tribe.</p> <p>b. Give a brief note of their administrative system</p>	



# INDIAN SCHOOL DARSAIT DEPARTMENT OF SOCIAL SCIENCE



V Observe the political map of India and identify the states marked from 1 to 5. Mention any one tribe of each state in the table given below



Sl No.	State	Tribe
1		
2		
3		
4		
5		

VI Map Work

On an outline political map of India mark and label the areas inhabited by the following tribal people.

- a. Gonds b. Bhils c. Khonds d. Maravas



**INDIAN SCHOOL DARSAIT  
DEPARTMENT OF SOCIAL SCIENCE**



**Practice Map**

